

Question Paper Preview

Notations :

- Options shown in green color and with ✓ icon are correct.
- Options shown in red color and with ✗ icon are incorrect.

Question Paper Name :	Actual Driver
Subject Name :	Driver
Creation Date :	2025-09-12 21:08:03
Duration :	120
Change Font Color :	No
Change Background Color :	No
Change Theme :	No
Help Button :	No
Show Reports :	No
Show Progress Bar :	No

Driver

Group Number :	1
Group Id :	4410091085169
Group Maximum Duration :	0
Group Minimum Duration :	120
Show Attended Group? :	No
Edit Attended Group? :	No
Break time :	0
Group Marks :	100

General Awareness

Section Id :	4410091096652
Section Number :	1
Section type :	Online
Mandatory or Optional :	Mandatory
Number of Questions :	25
Number of Questions to be attempted :	25
Maximum Instruction Time :	0
Sub-Section Number :	1
Sub-Section Id :	4410091100858
Question Shuffling Allowed :	Yes

Question Number : 1 Question Id : 4410091247686 Question Type : MCQ

On 8 April 1857, which Indian soldier was hanged to death at Barrackpore for attacking his officers, sparking the first major incident of the Revolt of 1857?

Options :

4410094923931. ✓ Mangal Pandey
4410094923932. ✗ Bahadur Shah Zafar
4410094923933. ✗ Kunwar Singh
4410094923934. ✗ Rani Lakshmibai

Question Number : 1 Question Id : 4410091247686 Question Type : MCQ

1857 के विद्रोह की पहली बड़ी घटना के रूप में अपने अधिकारियों पर हमला करने के लिए 8 अप्रैल 1857 को किस भारतीय सैनिक को बैरकपुर में फांसी दी गई?

Options :

4410094923931. ✓ मंगल पांडे

4410094923932. ✗ बहादुर शाह ज़फ़र

4410094923933. ✗ कुंवर सिंह

4410094923934. ✗ रानी लक्ष्मीबाई

Question Number : 2 Question Id : 4410091114734 Question Type : MCQ

Who composed the famous Hindu bhajan 'Vaishnava Jana to Tene Kahiye', which was popular during the Gandhian phase of the freedom struggle?

Options :

4410094394875. ✗ Tulsidas

4410094394876. ✗ Kabir

4410094394877. ✓ Narsinh Mehta

4410094394878. ✗ Mirabai

Question Number : 2 Question Id : 4410091114734 Question Type : MCQ

स्वतंत्रता संग्राम के गांधीवादी चरण के दौरान लोकप्रिय 'वैष्णव जन तो तेने कहिए' नामक प्रसिद्ध हिंदू भजन की रचना किसने की थी?

Options :

4410094394875. ✗ तुलसीदास

4410094394876. ✗ कबीर

4410094394877. ✓ नरसी मेहता

4410094394878. ✗ मीराबाई

Question Number : 3 Question Id : 4410091114738 Question Type : MCQ

Who established Sharda Sadan in Mumbai in 1889 and also founded 'Kripa Sadan' and 'Priti Sadan' for homeless widows?

Options :

4410094394895. ✗ Savitribai Phule

4410094394896. ✗ Ramabai Ranade

4410094394897. ✓ Pandita Ramabai

4410094394898. ✗ Annie Besant

Question Number : 3 Question Id : 4410091114738 Question Type : MCQ

निम्नलिखित में से किसने 1889 में मुंबई में शारदा सदन की स्थापना की और बेघर विधवाओं के लिए 'कृपा सदन' और 'प्रीति सदन' की स्थापना भी की?

Options :

4410094394895. ✗ सावित्रीबाई फुले

4410094394896. ✗ रमाबाई रानाडे

4410094394897. ✓ पंडिता रमाबाई

4410094394898. ✗ एनी बेसेंट

Question Number : 4 Question Id : 4410091247711 Question Type : MCQ

Amarendranath Chatterjee, active in the early 20th century, was associated with which revolutionary organisation while raising funds across Bihar, Odisha and the United Provinces?

Options :

4410094924027. ✗ Anushilan Samiti

4410094924028. ✓ Jugantar

4410094924029. ✗ Hindustan Socialist Republican Association

4410094924030. ✗ Ghadar Party

Question Number : 4 Question Id : 4410091247711 Question Type : MCQ

20वीं सदी के आरंभ में सक्रिय अमरेन्द्रनाथ चटर्जी बिहार, ओडिशा और संयुक्त प्रांत में धन जुटाने के दौरान किस क्रांतिकारी संगठन से संबद्ध थे?

Options :

- 4410094924027. ✖ अनुशीलन समिति
- 4410094924028. ✔ जुगांतर (Jugantar)
- 4410094924029. ✖ हिंदुस्तान सोशलिस्ट रिपब्लिकन एसोसिएशन
- 4410094924030. ✖ गदर पार्टी

Question Number : 5 Question Id : 441009606470 Question Type : MCQ

Which of the following is a martial art-based folk dance performed during temple festivals in the State of Kerala?

Options :

- 4410092380997. ✖ Kokali
- 4410092380998. ✖ Ottamthullal
- 4410092380999. ✖ Kavadiyattam
- 4410092381000. ✔ Velakali

Question Number : 5 Question Id : 441009606470 Question Type : MCQ

निम्नलिखित में से कौन-सा एक मार्शल आर्ट-आधारित लोक नृत्य है, जो केरल राज्य में मंदिर उत्सवों के दौरान किया जाता है?

Options :

- 4410092380997. ✖ कोकली (Kokali)
- 4410092380998. ✖ ओट्टमथुल्लल (Ottamthullal)
- 4410092380999. ✖ कूडियाट्टम (Kavadiyattam)
- 4410092381000. ✔ वेलकालि (Velakali)

Question Number : 6 Question Id : 441009608899 Question Type : MCQ

Gaddi Nati is a harvesting dance associated with which of the following States?

Options :

- 4410092390713. ✔ Himachal Pradesh
- 4410092390714. ✖ Chhattisgarh
- 4410092390715. ✖ Jharkhand
- 4410092390716. ✖ Haryana

Question Number : 6 Question Id : 441009608899 Question Type : MCQ

गद्दी नाटी एक फसलों की कटाई (harvesting) पर किया जाने वाला नृत्य है, जो निम्नलिखित में से किस राज्य से संबंधित है?

Options :

- 4410092390713. ✔ हिमाचल प्रदेश
- 4410092390714. ✖ छत्तीसगढ़
- 4410092390715. ✖ झारखंड
- 4410092390716. ✖ हरियाणा

Question Number : 7 Question Id : 4410091249823 Question Type : MCQ

Shovana Narayan is a renowned Indian classical dancer associated with which dance form?

Options :

- 4410094932455. ✖ Bharatanatyam
- 4410094932456. ✔ Kathak
- 4410094932457. ✖ Odissi
- 4410094932458. ✖ Manipuri

Question Number : 7 Question Id : 4410091249823 Question Type : MCQ

शोवना नारायण एक प्रसिद्ध भारतीय शास्त्रीय नृत्यांगना हैं जिनका संबंध किस नृत्य शैली से है?

Options :

- 4410094932455. ✖ भरतनाट्यम
- 4410094932456. ✔ कथक
- 4410094932457. ✖ ओडिसी
- 4410094932458. ✖ मणिपुरी

Question Number : 8 Question Id : 441009607282 Question Type : MCQ

Dr. Vasant Rao Deshpande was a legendary singer of _____ music and Natya Sangeet.

Options :

- 4410092384245. ✖ Carnatic
- 4410092384246. ✖ Modern
- 4410092384247. ✖ Folk
- 4410092384248. ✔ Hindustani

Question Number : 8 Question Id : 441009607282 Question Type : MCQ

डॉ. वसंतराव देशपांडे _____ संगीत और नाट्य संगीत के एक प्रसिद्ध गायक थे।

Options :

- 4410092384245. ✖ कर्नाटक
- 4410092384246. ✖ आधुनिक
- 4410092384247. ✖ लोक
- 4410092384248. ✔ हिंदुस्तानी

Question Number : 9 Question Id : 441009638458 Question Type : MCQ

Which of the following Indian States falls between Bhutan and Nepal?

Options :

- 4410092507975. ✖ Assam
- 4410092507976. ✖ Arunachal Pradesh
- 4410092507977. ✖ Mizoram
- 4410092507978. ✔ Sikkim

Question Number : 9 Question Id : 441009638458 Question Type : MCQ

निम्नलिखित में से कौन-सा भारतीय राज्य भूटान और नेपाल के बीच स्थित है?

Options :

- 4410092507975. ✖ असम
- 4410092507976. ✖ अरुणाचल प्रदेश
- 4410092507977. ✖ मिज़ोरम
- 4410092507978. ✔ सिक्किम

Question Number : 10 Question Id : 4410091114803 Question Type : MCQ

Why do the western coastal plains of India provide ideal conditions for the development of natural ports and harbours?

Options :

- 4410094395151. ✖ They are formed by extensive delta systems.
- 4410094395152. ✖ They have broad and sandy plains.
- 4410094395153. ✔ They are submerged coastal plains with narrow belts.
- 4410094395154. ✖ They are elevated rocky plateaus.

Question Number : 10 Question Id : 4410091114803 Question Type : MCQ

भारत के पश्चिमी तटीय मैदान प्राकृतिक बंदरगाहों और पोताश्रयों के विकास के लिए आदर्श दशाएँ क्यों प्रदान करते हैं?

Options :

4410094395151. ✖ इनका निर्माण विस्तृत डेल्टा प्रणालियों द्वारा होता है।
4410094395152. ✖ इनमें चौड़े और रेतीले मैदान होते हैं।
4410094395153. ✔ ये संकरी पट्टियों वाले निम्न तटीय मैदान हैं।
4410094395154. ✖ ये ऊँचे चट्टानी पठार हैं।

Question Number : 11 Question Id : 4410091114825 Question Type : MCQ

Why is the Great Indian Desert also known as 'Marusthali'?

Options :

4410094395239. ✖ It lies in the Himalayan rain shadow region.
4410094395240. ✖ It is a region of high rainfall and dense forests.
4410094395241. ✔ It has an arid climate with low rainfall and sparse vegetation.
4410094395242. ✖ It is formed by the deposition of alluvial soil from Himalayan rivers.

Question Number : 11 Question Id : 4410091114825 Question Type : MCQ

विशाल भारतीय मरुस्थल को 'मरुस्थली' के नाम से भी क्यों जाना जाता है?

Options :

4410094395239. ✖ यह हिमालय के वृष्टिछाया क्षेत्र में स्थित है।
4410094395240. ✖ यह उच्च वर्षा और घने वनों वाला क्षेत्र है।
4410094395241. ✔ इसकी जलवायु शुष्क है, वर्षा कम होती है और वनस्पति विरल है।
4410094395242. ✖ यह हिमालयी नदियों से जलोढ़ मृदा के निक्षेपण से बना है।

Question Number : 12 Question Id : 441009638452 Question Type : MCQ

Which of the following neighboring countries of India has a significant Moken population?

Options :

4410092507951. ✖ Nepal
4410092507952. ✖ Bhutan
4410092507953. ✔ Myanmar
4410092507954. ✖ Sri Lanka

Question Number : 12 Question Id : 441009638452 Question Type : MCQ

भारत के निम्नलिखित पड़ोसी देशों में से किसमें पर्याप्त मोकेन (Moken) आबादी है?

Options :

4410092507951. ✖ नेपाल
4410092507952. ✖ भूटान
4410092507953. ✔ म्यांमार
4410092507954. ✖ श्रीलंका

Question Number : 13 Question Id : 441009636864 Question Type : MCQ

Which of the following extreme stations are connected by the North-South corridor?

Options :

4410092501599. ✖ Srinagar and Mumbai
4410092501600. ✔ Srinagar and Kanyakumari
4410092501601. ✖ Leh and Kanyakumari
4410092501602. ✖ Jammu and Chennai

Question Number : 13 Question Id : 441009636864 Question Type : MCQ

निम्नलिखित में से कौन-से एक्सट्रीम स्टेशन उत्तर-दक्षिण गलियारे से जुड़े हैं?

Options :

4410092501599. ✖ श्रीनगर और मुंबई
4410092501600. ✔ श्रीनगर और कन्याकुमारी

4410092501601. ✖ लेह और कन्याकुमारी

4410092501602. ✖ जम्मू और चेन्नई

Question Number : 14 Question Id : 441009637524 Question Type : MCQ

Sardar Sarovar Project will provide irrigation facilities to drought-prone areas of which four States?

Options :

4410092504239. ✔ Gujarat, Rajasthan, Maharashtra and Madhya Pradesh

4410092504240. ✖ Uttar Pradesh, Gujarat, Rajasthan and Odisha

4410092504241. ✖ Maharashtra, Karnataka, Gujarat and Madhya Pradesh

4410092504242. ✖ Madhya Pradesh, Chhattisgarh, Gujarat and Rajasthan

Question Number : 14 Question Id : 441009637524 Question Type : MCQ

सरदार सरोवर परियोजना किन चार राज्यों के सूखा-संभावित क्षेत्रों को सिंचाई सुविधाएं प्रदान करेगी?

Options :

4410092504239. ✔ गुजरात, राजस्थान, महाराष्ट्र और मध्य प्रदेश

4410092504240. ✖ उत्तर प्रदेश, गुजरात, राजस्थान और ओडिशा

4410092504241. ✖ महाराष्ट्र, कर्नाटक, गुजरात और मध्य प्रदेश

4410092504242. ✖ मध्य प्रदेश, छत्तीसगढ़, गुजरात और राजस्थान

Question Number : 15 Question Id : 441009609869 Question Type : MCQ

India has been a member of which international economic organisation since 1 January 1995?

Options :

4410092394593. ✖ International Trade Centre

4410092394594. ✔ World Trade Organization

4410092394595. ✖ United Nations Commission on International Trade Law

4410092394596. ✖ World Trade Centers Association

Question Number : 15 Question Id : 441009609869 Question Type : MCQ

1 जनवरी 1995 से भारत किस अंतर्राष्ट्रीय आर्थिक संगठन का सदस्य है?

Options :

4410092394593. ✖ अंतर्राष्ट्रीय व्यापार केंद्र

4410092394594. ✔ विश्व व्यापार संगठन

4410092394595. ✖ संयुक्त राष्ट्र अंतर्राष्ट्रीय व्यापार विधि आयोग

4410092394596. ✖ विश्व व्यापार केंद्र संघ

Question Number : 16 Question Id : 441009510788 Question Type : MCQ

What is the primary focus of the Integrated Rural Development Program?

Options :

4410091998310. ✖ Industrial growth in rural areas

4410091998311. ✖ Digitalisation of villages

4410091998312. ✔ Providing employment and credit to rural households below the poverty line

4410091998313. ✖ Promotion of rural tourism

Question Number : 16 Question Id : 441009510788 Question Type : MCQ

एकीकृत ग्रामीण विकास कार्यक्रम का प्राथमिक फोकस क्या है?

Options :

4410091998310. ✖ ग्रामीण क्षेत्रों में औद्योगिक विकास

4410091998311. ✖ गांवों का डिजिटलीकरण

4410091998312. ✔ गरीबी रेखा से नीचे रहने वाले ग्रामीण परिवारों को रोजगार और ऋण उपलब्ध कराना

4410091998313. ✖ ग्रामीण पर्यटन को प्रोत्साहित करना

Question Number : 17 Question Id : 441009626996 Question Type : MCQ

One of the key objectives of financial sector reforms after 1991 was:

Options :

- 4410092462136. ✖ increasing RBI's direct control over credit distribution
- 4410092462137. ✔ reducing RBI's role from a regulator to a facilitator of the financial sector
- 4410092462138. ✖ nationalisation of private banks to strengthen control
- 4410092462139. ✖ fixing uniform interest rates across all banks

Question Number : 17 Question Id : 441009626996 Question Type : MCQ

1991 के बाद वित्तीय क्षेत्र के सुधारों का एक प्रमुख उद्देश्य क्या था?

Options :

- 4410092462136. ✖ क्रेडिट वितरण पर RBI का सीधा नियंत्रण बढ़ाना
- 4410092462137. ✔ RBI की भूमिका को वित्तीय क्षेत्र के नियामक से बदलकर इसके सुविधाकर्ता के रूप में कर देना
- 4410092462138. ✖ नियंत्रण बढ़ाने के लिए निजी बैंकों का राष्ट्रीयकरण करना
- 4410092462139. ✖ सभी बैंकों में एक समान ब्याज दरें निर्धारित करना

Question Number : 18 Question Id : 441009510398 Question Type : MCQ

What is the National Infrastructure Pipeline?

Options :

- 4410091996750. ✖ A project to enhance agricultural productivity
- 4410091996751. ✔ A government plan for infrastructure investment across sectors
- 4410091996752. ✖ A rural employment program
- 4410091996753. ✖ An energy conservation policy

Question Number : 18 Question Id : 441009510398 Question Type : MCQ

राष्ट्रीय अवसंरचना पाइपलाइन (National Infrastructure Pipeline) क्या है?

Options :

- 4410091996750. ✖ कृषि उत्पादकता बढ़ाने की एक परियोजना
- 4410091996751. ✔ विभिन्न क्षेत्रों की अवसंरचना में निवेश के लिए एक सरकारी योजना
- 4410091996752. ✖ एक ग्रामीण रोजगार कार्यक्रम
- 4410091996753. ✖ ऊर्जा संरक्षण नीति

Question Number : 19 Question Id : 4410091114303 Question Type : MCQ

In July 2025, which state government launched the Smart Mosquito Surveillance System (SMoSS), an AI-powered initiative to combat mosquito-borne diseases like dengue and malaria?

Options :

- 4410094393202. ✖ Karnataka
- 4410094393203. ✖ Kerala
- 4410094393204. ✔ Andhra Pradesh
- 4410094393205. ✖ Tamil Nadu

Question Number : 19 Question Id : 4410091114303 Question Type : MCQ

जुलाई 2025 में, किस राज्य सरकार ने डेंगू और मलेरिया जैसी मच्छर जनित बीमारियों से निपटान के लिए AI-संचालित पहल, स्मार्ट मच्छर निगरानी प्रणाली (Smart Mosquito Surveillance System - SMoSS) शुरू की?

Options :

- 4410094393202. ✖ कर्नाटक
- 4410094393203. ✖ केरल
- 4410094393204. ✔ आंध्र प्रदेश
- 4410094393205. ✖ तमिलनाडु

Question Number : 20 Question Id : 4410091114381 Question Type : MCQ

In May 2025, Google launched which AI-first 3D video communication platform that evolved from Project Starline?

Options :

- 4410094393510. ✖ Google Halo
- 4410094393511. ✖ Google Horizon
- 4410094393512. ✔ Google Beam
- 4410094393513. ✖ Google Vision

Question Number : 20 Question Id : 4410091114381 Question Type : MCQ

मई 2025 में, गूगल ने कौन-सा AI-फ़र्स्ट 3D वीडियो संचार प्लेटफ़ॉर्म लॉन्च किया जो प्रोजेक्ट स्टारलाइन (Starline) से विकसित हुआ?

Options :

- 4410094393510. ✖ Google Halo
- 4410094393511. ✖ Google Horizon
- 4410094393512. ✔ Google Beam
- 4410094393513. ✖ Google Vision

Question Number : 21 Question Id : 4410091114324 Question Type : MCQ

Under the National Sports Governance Bill, 2025, recognised sports organisations have been brought under which legislation to enhance transparency and accountability?

Options :

- 4410094393286. ✖ Public Records Act
- 4410094393287. ✔ Right to Information (RTI) Act
- 4410094393288. ✖ National Sports Code
- 4410094393289. ✖ Indian Contract Act

Question Number : 21 Question Id : 4410091114324 Question Type : MCQ

राष्ट्रीय खेल प्रशासन विधेयक, 2025 के तहत, पारदर्शिता और उत्तरदायित्व के वर्धन के लिए मान्यता प्राप्त खेल संगठनों को किस कानून के तहत लाया गया है?

Options :

- 4410094393286. ✖ सार्वजनिक अभिलेख अधिनियम
- 4410094393287. ✔ सूचना का अधिकार (RTI) अधिनियम
- 4410094393288. ✖ राष्ट्रीय खेल संहिता
- 4410094393289. ✖ भारतीय अनुबंध अधिनियम

Question Number : 22 Question Id : 4410091114331 Question Type : MCQ

In Rugby, which state emerged as the winner of the U-18 Boys' title at the 10th Junior National Rugby 7s Championship 2025?

Options :

- 4410094393314. ✖ Punjab
- 4410094393315. ✔ Bihar
- 4410094393316. ✖ Karnataka
- 4410094393317. ✖ Goa

Question Number : 22 Question Id : 4410091114331 Question Type : MCQ

रग्बी में, कौन-सा राज्य 10वीं जूनियर नेशनल रग्बी 7s चैम्पियनशिप 2025 में अंडर-18 ब्वायज के खिताब का विजेता बना?

Options :

- 4410094393314. ✖ पंजाब
- 4410094393315. ✔ बिहार
- 4410094393316. ✖ कर्नाटक
- 4410094393317. ✖ गोवा

Question Number : 23 Question Id : 441009630539 Question Type : MCQ

Gagan Gill won Sahitya Akademi Award 2024 in which genre?

Options :

- 4410092476303. ✓ Poetry
- 4410092476304. ✗ Novel
- 4410092476305. ✗ Essays
- 4410092476306. ✗ Literary Critics

Question Number : 23 Question Id : 441009630539 Question Type : MCQ

गगन गिल ने किस विधा में 2024 का साहित्य अकादमी पुरस्कार जीता?

Options :

- 4410092476303. ✓ काव्य
- 4410092476304. ✗ उपन्यास
- 4410092476305. ✗ निबंध
- 4410092476306. ✗ साहित्यिक समालोचना

Question Number : 24 Question Id : 4410091114374 Question Type : MCQ

In July 2025, which six-year national scheme received Cabinet approval to invest ₹24,000 crore annually for boosting agriculture and allied sectors across 100 selected districts?

Options :

- 4410094393482. ✓ Prime Minister Dhan-Dhaanya Krishi Yojana
- 4410094393483. ✗ Pradhan Mantri Annadata Utthan Mission
- 4410094393484. ✗ Rashtriya Krishi Samridhi Abhiyan
- 4410094393485. ✗ Crop Productivity and Rural Upliftment Scheme

Question Number : 24 Question Id : 4410091114374 Question Type : MCQ

जुलाई 2025 में, किस छह-वर्षीय राष्ट्रीय योजना को 100 चयनित जिलों में कृषि और संबद्ध क्षेत्रों को बढ़ावा देने के लिए सालाना 24,000 करोड़ रुपये का निवेश करने के लिए कैबिनेट की मंजूरी मिली?

Options :

- 4410094393482. ✓ प्रधानमंत्री धन-धान्य कृषि योजना
- 4410094393483. ✗ प्रधानमंत्री अन्नदाता उत्थान मिशन
- 4410094393484. ✗ राष्ट्रीय कृषि समृद्धि अभियान
- 4410094393485. ✗ फसल उत्पादकता एवं ग्रामीण उत्थान योजना

Question Number : 25 Question Id : 4410091114352 Question Type : MCQ

In July 2025, the National Institute for Empowerment of Persons with Intellectual Disabilities (NIEPID) signed an MoU with Jai Vakeel Foundation to implement a structured and scalable curriculum for which group?

Options :

- 4410094393398. ✗ Children with visual and hearing impairments
- 4410094393399. ✓ Children with intellectual disabilities
- 4410094393400. ✗ Adults with physical disabilities
- 4410094393401. ✗ Women with mental health challenges

Question Number : 25 Question Id : 4410091114352 Question Type : MCQ

जुलाई 2025 में, राष्ट्रीय बौद्धिक दिव्यांगजन सशक्तिकरण संस्थान (NIEPID) ने किस समूह के लिए एक संरचित और मापनीय पाठ्यचर्या लागू करने के लिए जय वकील फाउंडेशन के साथ एक समझौता ज्ञापन पर हस्ताक्षर किए?

Options :

- 4410094393398. ✗ दृष्टि और श्रवण बाधित बच्चे
- 4410094393399. ✓ बौद्धिक दिव्यांग बच्चे
- 4410094393400. ✗ शारीरिक दिव्यांग वयस्क
- 4410094393401. ✗ मानसिक स्वास्थ्य चुनौतियों वाली महिलाएँ

General Intelligence and Reasoning

Section Id :	4410091096653
Section Number :	2
Section type :	Online
Mandatory or Optional :	Mandatory
Number of Questions :	25
Number of Questions to be attempted :	25
Maximum Instruction Time :	0
Sub-Section Number :	1
Sub-Section Id :	4410091100859
Question Shuffling Allowed :	Yes

Question Number : 26 Question Id : 441009775218 Question Type : MCQ

Seven people, A, B, C, D, E, F, and G, are sitting in a straight line, facing the north.

A sits second from one of the extreme ends of the line. Only two people sit between A and B. C sits second to the right of B. Only three people sit between C and D. F sits second to the left of D. E sits at one of the positions to the right of G.

How many people sit between A and G?

Options :

4410093054875. ✖ None

4410093054876. ✔ One

4410093054877. ✖ Two

4410093054878. ✖ Three

Question Number : 26 Question Id : 441009775218 Question Type : MCQ

सात व्यक्ति, A, B, C, D, E, F और G, एक सीधी पंक्ति में उत्तर की ओर अभिमुख होकर बैठे हैं।

A, पंक्ति के किसी एक छोर से दूसरे स्थान पर बैठा है। केवल दो व्यक्ति A और B के बीच बैठे हैं। C, B के दाईं ओर दूसरे स्थान पर बैठा है।

केवल तीन व्यक्ति C और D के बीच बैठे हैं। E, D के बाईं ओर दूसरे स्थान पर बैठा है। E, G के दाईं ओर किसी एक स्थान पर बैठा है।

कितने व्यक्ति A और G के बीच बैठे हैं?

Options :

4410093054875. ✖ एक भी नहीं

4410093054876. ✔ एक

4410093054877. ✖ दो

4410093054878. ✖ तीन

Question Number : 27 Question Id : 441009754633 Question Type : MCQ

Seven people I, J, K, L, G, H and O are sitting in a row, facing north. Only five people sit between O and I. L sits to the

immediate left of I. Only one person sits between L and J. H sits at some place to the left of K but at some place to the right of G.

Who sits third from the left end of the line?

Options :

4410092972525. ✖ G

4410092972526. ✔ H

4410092972527. ✖ O

4410092972528. ✖ L

Question Number : 27 Question Id : 441009754633 Question Type : MCQ

सात व्यक्ति I, J, K, L, G, H और O एक पंक्ति में उत्तर की ओर अभिमुख होकर बैठे हैं। केवल पाँच व्यक्ति O और I के बीच बैठे हैं। L, I के ठीक बाएं बैठा है। L और J के बीच केवल एक व्यक्ति बैठा है। H, K के बाएं किसी स्थान पर लेकिन G के दाएं किसी स्थान पर बैठा है। पंक्ति

के बाएं छोर से तीसरे स्थान पर कौन बैठा है?

Options :

4410092972525. ✖ G

4410092972526. ✔ H

4410092972527. ✖ O

4410092972528. ✖ L

Question Number : 28 Question Id : 441009775668 Question Type : MCQ

Six boxes, L, M, N, O, P, and Q, are kept one over the other but not necessarily in the same order. Q is placed at the topmost position. N is placed immediately below P. M is placed immediately above P. L is placed second from the bottom. Which box is placed at the bottommost position?

Options :

4410093056675. ✖ P

4410093056676. ✖ N

4410093056677. ✖ M

4410093056678. ✔ O

Question Number : 28 Question Id : 441009775668 Question Type : MCQ

छह बॉक्स, L, M, N, O, P और Q, एक के ऊपर एक रखे गए हैं, लेकिन जरूरी नहीं कि इसी क्रम में रखे गए हों। Q सबसे ऊपर रखा गया है। N, P के ठीक नीचे रखा गया है। M, P के ठीक ऊपर रखा गया है। L नीचे से दूसरे स्थान पर रखा गया है। कौन-सा बॉक्स सबसे नीचे रखा गया है?

Options :

4410093056675. ✖ P

4410093056676. ✖ N

4410093056677. ✖ M

4410093056678. ✔ O

Question Number : 29 Question Id : 441009755417 Question Type : MCQ

Shanti is ranked 11th from the bottom and 39th from the top in her class. How many students are there in her class?

Options :

4410092975661. ✖ 47

4410092975662. ✖ 48

4410092975663. ✔ 49

4410092975664. ✖ 50

Question Number : 29 Question Id : 441009755417 Question Type : MCQ

शांति अपनी कक्षा में नीचे से 11वें और ऊपर से 39वें स्थान पर है। उसकी कक्षा में कितने विद्यार्थी हैं?

Options :

4410092975661. ✖ 47

4410092975662. ✖ 48

4410092975663. ✔ 49

4410092975664. ✖ 50

Question Number : 30 Question Id : 441009757236 Question Type : MCQ

Each vowel in the word PHARAOH is changed to the letter immediately following it in the English alphabetical order and each consonant is changed to the letter immediately preceding it in the English alphabetical order. How many letters will appear exactly twice in the new group of letters thus formed?

Options :

4410092982937. ✖ 0

4410092982938. ✖ 1

4410092982939. ✔ 2

4410092982940. ✖ 3

Question Number : 30 Question Id : 441009757236 Question Type : MCQ

शब्द PHARAOH में प्रत्येक स्वर को अंग्रेजी वर्णमाला क्रम में उसके ठीक बाद वाले अक्षर से बदल दिया जाए और प्रत्येक व्यंजन को अंग्रेजी वर्णमाला क्रम में उसके ठीक पहले वाले अक्षर से बदल दिया जाए। इस प्रकार बने अक्षरों के नए समूह में कितने अक्षर ठीक दो बार आएंगे?

Options :

4410092982937. ✖ 0

4410092982938. ✖ 1

4410092982939. ✔ 2

4410092982940. ✖ 3

Question Number : 31 Question Id : 441009769295 Question Type : MCQ

Refer to the following letter, symbol series and answer the question that follows. Counting to be done from left to right only.

(Left) I M € % # # B \$ B S D % D G & I @ Z J # K M (Right)

How many such letters are there, each of which is immediately preceded by a symbol and also immediately followed by a symbol?

Options :

4410093031173. ✔ 2

4410093031174. ✖ 3

4410093031175. ✖ 1

4410093031176. ✖ 4

Question Number : 31 Question Id : 441009769295 Question Type : MCQ

निम्नलिखित अक्षर, प्रतीक श्रृंखला का संदर्भ लें और नीचे दिए गए प्रश्न का उत्तर दीजिए। गिनती केवल बाएं से दाएं की जानी है।

(बाएं) I M € % # # B \$ B S D % D G & I @ Z J # K M (दाएं)

ऐसे कितने अक्षर हैं, जिनमें से प्रत्येक के ठीक पहले एक प्रतीक है और ठीक बाद भी एक प्रतीक है?

Options :

4410093031173. ✔ 2

4410093031174. ✖ 3

4410093031175. ✖ 1

4410093031176. ✖ 4

Question Number : 32 Question Id : 441009769558 Question Type : MCQ

Refer to the following letter series and answer the question that follows. Counting to be done from left to right only.

(Left) X A I C E F E A L C Z I K T Z R U U W A F O (Right)

How many such consonants are there, each of which is immediately preceded by a consonant and also immediately followed by a consonant?

Options :

4410093032225. ✔ 3

4410093032226. ✖ 4

4410093032227. ✖ 5

4410093032228. ✖ 1

Question Number : 32 Question Id : 441009769558 Question Type : MCQ

निम्नलिखित अक्षर श्रृंखला का संदर्भ लें और उसके बाद दिए गए प्रश्न का उत्तर दें। गिनती केवल बाएं से दाएं की जानी है।

(बाएं) X A I C E F E A L C Z I K T Z R U U W A F O (दाएं)

ऐसे कितने व्यंजन हैं, जिनमें से प्रत्येक के ठीक पहले एक व्यंजन और ठीक बाद में भी एक व्यंजन है?

Options :

4410093032225. ✔ 3

4410093032226. ✖ 4

4410093032227. ✖ 5

4410093032228. ✖ 1

Question Number : 33 Question Id : 441009775764 Question Type : MCQ

Refer to the following letter, symbol series and answer the question that follows. Counting to be done from left to right only.

(Left) K E Q % * # E Q + H H H O W U Q X R / B O (Right)

How many such letters are there, each of which is immediately preceded by a letter and also immediately followed by a symbol?

Options :

4410093057059. ✖ One

4410093057060. ✖ Two

4410093057061. ✔ Three

4410093057062. ✖ Four

Question Number : 33 Question Id : 441009775764 Question Type : MCQ

निम्नलिखित अक्षर, प्रतीक श्रृंखला का सदर्थ लें और नीचे दिए गए प्रश्न का उत्तर दीजिए। गिनती केवल बाएं से दाएं की जानी है।

(बाएं) K E Q % * # E Q + H H H O W U Q X R / B O (दाएं)

ऐसे कितने अक्षर हैं, जिनमें से प्रत्येक के ठीक पहले एक अक्षर और ठीक बाद एक प्रतीक है?

Options :

4410093057059. ✖ एक

4410093057060. ✖ दो

4410093057061. ✔ तीन

4410093057062. ✖ चार

Question Number : 34 Question Id : 441009762751 Question Type : MCQ

Refer to the following number series and answer the question that follows (all numbers are single-digit numbers only). Counting to be done from left to right.

(Left) 1 2 1 3 2 1 4 3 5 2 4 6 3 5 7 4 6 5 8 6 7 7 9 8 8 1 9 (Right)

How many such even digits are there, each of which is immediately preceded by a perfect square and immediately followed by an odd digit? (Note: 1 is also a perfect square.)

Options :

4410093004997. ✔ Four

4410093004998. ✖ Three

4410093004999. ✖ Two

4410093005000. ✖ None

Question Number : 34 Question Id : 441009762751 Question Type : MCQ

निम्नलिखित संख्या श्रृंखला का संदर्भ लें और उसके बाद दिए गए प्रश्न का उत्तर दें (सभी संख्याएँ केवल एकल-अंकीय संख्याएँ हैं)। गिनती बाएं से दाएं की जानी है।

(बाएं) 1 2 1 3 2 1 4 3 5 2 4 6 3 5 7 4 6 5 8 6 7 7 9 8 8 1 9 (दाएं)

ऐसे कितने सम अंक हैं, जिनमें से प्रत्येक के ठीक पहले एक पूर्ण वर्ग और ठीक बाद एक विषम अंक है? (नोट: 1 भी एक पूर्ण वर्ग है।)

Options :

4410093004997. ✔ चार

4410093004998. ✖ तीन

4410093004999. ✖ दो

4410093005000. ✖ एक भी नहीं

Question Number : 35 Question Id : 441009804800 Question Type : MCQ

In a certain code language,

A ; B means 'A is the father of B',

A - B means 'A is the sister of B',

A * B means 'A is the wife of B', and

A > B means 'A is the brother of B'.

Based on the above, how is I related to S if 'I * N ; K - A > S'?

Options :

4410093173323. ✖ Father

4410093173324. ✖ Sister

4410093173325. ✖ Brother

4410093173326. ✔ Mother

Question Number : 35 Question Id : 441009804800 Question Type : MCQ

एक निश्चित कूट भाषा में,

A ; B का अर्थ है कि 'A, B का पिता है',

A - B का अर्थ है कि 'A, B की बहन है',

A * B का अर्थ है कि 'A, B की पत्नी है', और

A > B का अर्थ है कि 'A, B का भाई है'।

उपर्युक्त के आधार पर, यदि 'I * N ; K - A > S' है, तो I का S से क्या संबंध है?

Options :

4410093173323. ✖ पिता

4410093173324. ✖ बहन

4410093173325. ✖ भाई

4410093173326. ✔ माता

Question Number : 36 Question Id : 441009879212 Question Type : MCQ

In a certain code language,

'Y + Z' means 'Y is the brother of Z',

'Y * Z' means 'Y is the sister of Z',

'Y @ Z' means 'Y is the mother of Z' and

'Y - Z' means 'Y is the father of Z'.

How is C related to D if 'D - Y * C + B'?

Options :

4410093470501. ✔ Son

4410093470502. ✖ Brother

4410093470503. ✖ Daughter's husband

4410093470504. ✖ Father

Question Number : 36 Question Id : 441009879212 Question Type : MCQ

एक निश्चित कूट भाषा में,

'Y + Z' का अर्थ है कि 'Y, Z का भाई है',

'Y * Z' का अर्थ है कि 'Y, Z की बहन है',

'Y @ Z' का अर्थ है कि 'Y, Z की माता है' और

'Y - Z' का अर्थ है कि 'Y, Z का पिता है'।

यदि 'D - Y * C + B' है, तो C का D से क्या संबंध है?

Options :

4410093470501. ✔ पुत्र

4410093470502. ✖ भाई

4410093470503. ✖ पुत्री का पति

4410093470504. ✖ पिता

Question Number : 37 Question Id : 441009780435 Question Type : MCQ

In a certain code language, 'lower the voice' is coded as 'hm nv uk' and 'voice of people' is coded as 'xb cp nv'. How is 'voice' coded in the given language?

Options :

4410093075743. ✖ uk

4410093075744. ✔ nv

4410093075745. ✖ hm

4410093075746. ✖ cp

Question Number : 37 Question Id : 441009780435 Question Type : MCQ

एक निश्चित कूट भाषा में, 'lower the voice' को 'hm nv uk' के रूप में कूटबद्ध किया गया है और 'voice of people' को 'xb cp nv' के रूप में कूटबद्ध किया गया है। दी गई भाषा में 'voice' को किस प्रकार कूटबद्ध किया जाएगा?

Options :

4410093075743. ✖ uk

4410093075744. ✔ nv

4410093075745. ✖ hm

4410093075746. ✖ cp

Question Number : 38 Question Id : 441009759590 Question Type : MCQ

In a certain code language, 'skin input pit' is coded as 'iv mr gy' and 'node skin loss' is coded as 'gy yp uz'. How is 'skin' coded in that language?

Options :

4410092992353. ✔ gy

4410092992354. ✖ iv

4410092992355. ✖ mr

4410092992356. ✖ yp

Question Number : 38 Question Id : 441009759590 Question Type : MCQ

एक निश्चित कूट भाषा में, 'skin input pit' को 'iv mr gy' के रूप में कूटबद्ध किया गया है तथा 'node skin loss' को 'gy yp uz' के रूप में कूटबद्ध किया गया है। उसी भाषा में 'skin' को किस प्रकार कूटबद्ध किया जाएगा?

Options :

4410092992353. ✔ gy

4410092992354. ✖ iv

4410092992355. ✖ mr

4410092992356. ✖ yp

Question Number : 39 Question Id : 441009755758 Question Type : MCQ

Read the given statements and conclusions carefully. Assuming that the information given in the statements is true, even if it appears to be at variance with commonly known facts, decide which of the given conclusions logically follow(s) from the statements.

Statements:

Some cats are pigs.

All dogs are pigs.

Conclusions:

(I): Some cats are dogs.

(II): All pigs are dogs.

Options :

4410092977025. ✔ Neither conclusion (I) nor (II) follows.

4410092977026. ✖ Both conclusions (I) and (II) follow.

4410092977027. ✖ Only conclusion (II) follows.

4410092977028. ✖ Only conclusion (I) follows.

Question Number : 39 Question Id : 441009755758 Question Type : MCQ

दिए गए कथनों और निष्कर्षों को ध्यानपूर्वक पढ़ें। यह मानते हुए कि कथनों में दी गई जानकारी सत्य है, भले ही वह सामान्यतः ज्ञात तथ्यों से भिन्न प्रतीत होती हो, निर्णय लें कि दिए गए निष्कर्षों में से कौन-सा/से निष्कर्ष कथनों का तार्किक रूप से अनुसरण करता है/करते हैं।

कथन:

कुछ बिल्लियाँ, सूअर हैं।

सभी कुत्ते, सूअर हैं।

निष्कर्ष:

(I): कुछ बिल्लियाँ, कुत्ते हैं।

(II): सभी सूअर, कुत्ते हैं।

Options :

4410092977025. ✓ न तो निष्कर्ष (I) और न ही (II) अनुसरण करता है।

4410092977026. ✗ निष्कर्ष (I) और (II) दोनों अनुसरण करते हैं।

4410092977027. ✗ केवल निष्कर्ष (II) अनुसरण करता है।

4410092977028. ✗ केवल निष्कर्ष (I) अनुसरण करता है।

Question Number : 40 Question Id : 441009757549 Question Type : MCQ

UYXW is related to SWVU in a certain way based on the English alphabetical order. In the same way, JNML is related to HLKJ. To which of the given options is AEDC related, following the same logic?

Options :

4410092984189. ✓ YCBA

4410092984190. ✗ YDAI

4410092984191. ✗ YBAA

4410092984192. ✗ YCAA

Question Number : 40 Question Id : 441009757549 Question Type : MCQ

अंग्रेजी वर्णमाला क्रम के आधार पर, UYXW का संबंध एक निश्चित तरीके से SWVU से है। उसी प्रकार, JNML का संबंध HLKJ से है। उसी तर्क के अनुसार, AEDC का संबंध दिए गए विकल्पों में से किससे है?

Options :

4410092984189. ✓ YCBA

4410092984190. ✗ YDAI

4410092984191. ✗ YBAA

4410092984192. ✗ YCAA

Question Number : 41 Question Id : 441009745187 Question Type : MCQ

Which of the given letter-clusters should replace # and % so that the pattern and relationship followed between the letter-cluster pair on the left side of :: is the same as that on the right side of ::?

: WXZ :: OPR : %

Options :

4410092934504. ✓ # = VWY , % = PQS

4410092934505. ✗ # = VWY , % = PPT

4410092934506. ✗ # = VYA , % = PQS

4410092934507. ✗ # = VWX , % = OPR

Question Number : 41 Question Id : 441009745187 Question Type : MCQ

दिए गए अक्षर-समूहों में से किसके द्वारा # और % को प्रतिस्थापित किया जाना चाहिए ताकि :: के बाईं ओर के अक्षर-समूह युग्म के बीच का पैटर्न और संबंध :: के दाईं ओर के अक्षर-समूह युग्म के बीच के पैटर्न और संबंध के समान हो?

: WXZ :: OPR : %

Options :

4410092934504. ✓ # = VWY , % = PQS

4410092934505. ✗ # = VWY , % = PPT

4410092934506. ✗ # = VYA , % = PQS

4410092934507. ✗ # = VWX , % = OPR

Question Number : 42 Question Id : 441009769205 Question Type : MCQ

Based on the English alphabetical order, three of the following four letter-clusters are alike in a certain way and thus form a group. Which letter-cluster DOES NOT belong to that group?

(Note: The odd one out is not based on the number of consonants/vowels or their position in the letter-cluster.)

Options :

4410093030813. ✓ USS

4410093030814. ✗ LIJ

4410093030815. ✗ BYZ

4410093030816. ✗ AXY

Question Number : 42 Question Id : 441009769205 Question Type : MCQ

अंग्रेजी वर्णमाला क्रम के आधार पर, निम्नलिखित चार अक्षर-समूहों में से तीन एक निश्चित रूप से एकसमान हैं और इस प्रकार एक ग्रुप बनाते हैं। कौन-सा अक्षर-समूह उस ग्रुप से संबंधित **नहीं** है?

(नोट: असंगत अक्षर-समूह व्यंजनों/स्वरों की संख्या या उनकी स्थिति पर आधारित नहीं है।)

Options :

4410093030813. ✓ USS

4410093030814. ✗ LIJ

4410093030815. ✗ BYZ

4410093030816. ✗ AXY

Question Number : 43 Question Id : 441009757798 Question Type : MCQ

Based on the English alphabetical order, three of the following four letter-clusters are alike in a certain way and thus form a group. Which letter-cluster DOES NOT belong to that group?

(Note: The odd one out is not based on the number of consonants/vowels or their position in the letter-cluster.)

Options :

4410092985185. ✓ RVQ

4410092985186. ✗ JMI

4410092985187. ✗ KNJ

4410092985188. ✗ ZCY

Question Number : 43 Question Id : 441009757798 Question Type : MCQ

अंग्रेजी वर्णमाला क्रम के आधार पर, निम्नलिखित चार अक्षर-समूहों में से तीन एक निश्चित रूप से एकसमान हैं और इस प्रकार एक ग्रुप बनाते हैं। कौन-सा अक्षर-समूह उस ग्रुप से संबंधित **नहीं** है?

(नोट: असंगत अक्षर-समूह व्यंजनों/स्वरों की संख्या या उनकी स्थिति पर आधारित नहीं है।)

Options :

4410092985185. ✓ RVQ

4410092985186. ✗ JMI

4410092985187. ✗ KNJ

4410092985188. ✗ ZCY

Question Number : 44 Question Id : 441009754683 Question Type : MCQ

What should come in place of (?) in the given series based on the English alphabetical order?

QVP TYS WBV ZEY ?

Options :

4410092972725. ✓ CHB

4410092972726. ✗ CHL

4410092972727. ✗ CHO

4410092972728. ✗ CHZ

Question Number : 44 Question Id : 441009754683 Question Type : MCQ

अंग्रेजी वर्णमाला क्रम के आधार पर दी गई श्रृंखला में (?) के स्थान पर क्या आना चाहिए?

QVP TYS WBV ZEY ?

Options :

4410092972725. ✓ CHB

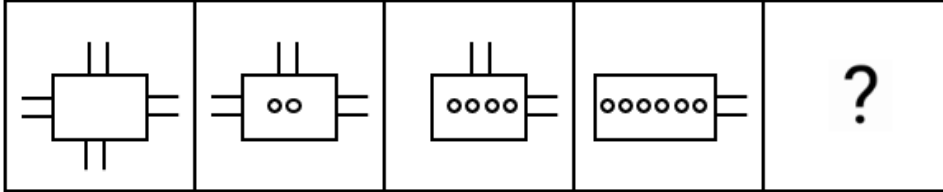
4410092972726. ✗ CHL

4410092972727. ✗ CHO

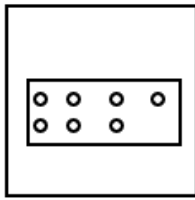
4410092972728. ✗ CHZ

Question Number : 45 Question Id : 441009860864 Question Type : MCQ

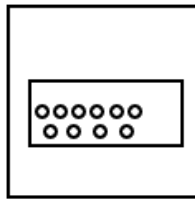
Identify the figure given in the options which when put in place of the question mark (?) will logically complete the series.



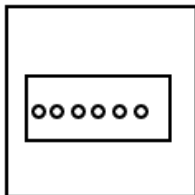
Options :



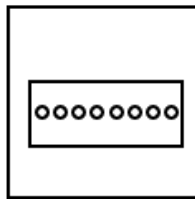
4410093396506. ✗



4410093396507. ✗



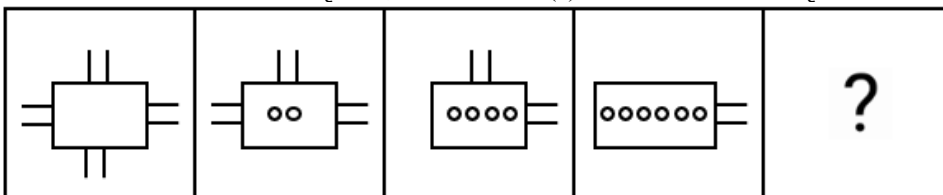
4410093396508. ✗



4410093396509. ✓

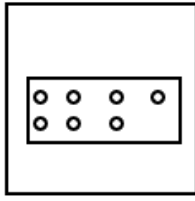
Question Number : 45 Question Id : 441009860864 Question Type : MCQ

निम्नलिखित में से वह कौन-सी आकृति है, जिसे प्रश्न-चिन्ह (?) के स्थान पर रखने पर श्रृंखला तार्किक रूप से पूरी हो जाएगी?

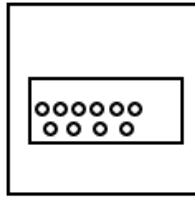


Options :

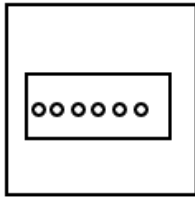
4410093396506. ✖



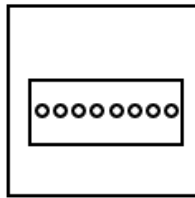
4410093396507. ✖



4410093396508. ✖

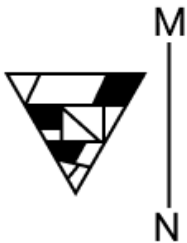


4410093396509. ✔



Question Number : 46 Question Id : 441009861168 Question Type : MCQ

Select the correct mirror image of the given figure when the mirror is placed at MN as shown below.



Options :

4410093397722. ✔



4410093397723. ✖



4410093397724. ✖



4410093397725. ✖



Question Number : 46 Question Id : 441009861168 Question Type : MCQ

चित्रानुसार दर्पण को MN पर रखे जाने पर नीचे दी गई आकृति के सही दर्पण प्रतिबिंब का चयन कीजिए।



Options :



4410093397722. ✔



4410093397723. ✖



4410093397724. ✖



4410093397725. ✖

Question Number : 47 Question Id : 441009989911 Question Type : MCQ

If 'A' stands for '+', 'B' stands for 'x', 'C' stands for '+' and 'D' stands for '-', then what will come in place of question mark (?) in the following equation?

$$7 \text{ B } 2 \text{ D } 8 \text{ A } 2 \text{ C } 4 = ?$$

Options :

4410093911899. ✖ 12

4410093911900. ✔ 14

4410093911901. ✖ 16

4410093911902. ✖ 18

Question Number : 47 Question Id : 441009989911 Question Type : MCQ

यदि 'A' का अर्थ '+' है, 'B' का अर्थ 'x' है, 'C' का अर्थ '+' है तथा 'D' का अर्थ '-' है, तो निम्नलिखित समीकरण में प्रश्न-चिह्न (?) के स्थान पर क्या आएगा?

$$7 \text{ B } 2 \text{ D } 8 \text{ A } 2 \text{ C } 4 = ?$$

Options :

4410093911899. ✖ 12

4410093911900. ✔ 14

4410093911901. ✖ 16

4410093911902. ✖ 18

Question Number : 48 Question Id : 441009989931 Question Type : MCQ

Each of the digits in the number 7845312 is arranged in ascending order from left to right. What will be the sum of the digits which are second from the left and second from the right in the new number thus formed?

Options :

4410093911979. ✔ 9

4410093911980. ✖ 10

4410093911981. ✖ 11

4410093911982. ✖ 12

Question Number : 48 Question Id : 441009989931 Question Type : MCQ

संख्या 7845312 में, प्रत्येक अंक को बाएं से दाएं आरोही क्रम में व्यवस्थित किया जाता है। इस प्रकार बनी गई संख्या में बाएं से दूसरे और दाएं से दूसरे अंकों का योगफल कितना होगा?

Options :

4410093911979. ✔ 9

4410093911980. ✖ 10

4410093911981. ✖ 11

4410093911982. ✖ 12

Question Number : 49 Question Id : 441009989457 Question Type : MCQ

What should come in place of the question mark (?) in the given series?

5 11 18 26 35 ?

Options :

4410093910081. ✖ 44

4410093910082. ✔ 45

4410093910083. ✖ 46

4410093910084. ✖ 47

Question Number : 49 Question Id : 441009989457 Question Type : MCQ

दी गई श्रृंखला में प्रश्न-चिह्न (?) के स्थान पर क्या आएगा?

5 11 18 26 35 ?

Options :

4410093910081. ✖ 44

4410093910082. ✔ 45

4410093910083. ✖ 46

4410093910084. ✖ 47

Question Number : 50 Question Id : 441009989837 Question Type : MCQ

What should come in place of the question mark (?) in the given series?

9 19 30 42 55 ?

Options :

4410093911607. ✖ 68

4410093911608. ✔ 69

4410093911609. ✖ 70

4410093911610. ✖ 71

Question Number : 50 Question Id : 441009989837 Question Type : MCQ

दी गई श्रृंखला में प्रश्न-चिह्न (?) के स्थान पर क्या आएगा?

9 19 30 42 55 ?

Options :

4410093911607. ✖ 68

4410093911608. ✔ 69

4410093911609. ✖ 70

4410093911610. ✖ 71

Numerical Aptitude

Section Id :	4410091096654
Section Number :	3
Section type :	Online
Mandatory or Optional :	Mandatory
Number of Questions :	25
Number of Questions to be attempted :	25
Maximum Instruction Time :	0
Sub-Section Number :	1
Sub-Section Id :	4410091100860
Question Shuffling Allowed :	Yes

Question Number : 51 Question Id : 441009539336 Question Type : MCQ

A Physics test was taken by 77 students in a class. Out of them, 24 students scored an average of 59, while the remaining students scored an average of 56. Find the overall average score of the entire class, rounded to one decimal place.

Options :

4410092112740. ✔ 56.9

4410092112741. ✖ 63.3

4410092112742. ✖ 66.6

4410092112743. ✖ 55.1

Question Number : 51 Question Id : 441009539336 Question Type : MCQ

एक कक्षा में 77 विद्यार्थियों ने भौतिकी की परीक्षा दी। उनमें से, 24 विद्यार्थियों के औसत अंक 59 हैं, जबकि शेष विद्यार्थियों के औसत अंक 56 हैं। संपूर्ण कक्षा का समग्र औसत अंक (दशमलव के एक स्थान तक पूर्णांकित) ज्ञात कीजिए।

Options :

4410092112740. ✔ 56.9

4410092112741. ✖ 63.3

4410092112742. ✖ 66.6

4410092112743. ✖ 55.1

Question Number : 52 Question Id : 441009539738 Question Type : MCQ

In what ratio must a grocer mix two varieties of wheat worth ₹64 per kg and ₹102 per kg so that, if he sells the mixture at ₹111 per kg, he may gain 11%?

Options :

4410092114348. ✔ 1 : 18

4410092114349. ✖ 3 : 19

4410092114350. ✖ 1 : 22

4410092114351. ✖ 11 : 23

Question Number : 52 Question Id : 441009539738 Question Type : MCQ

एक पंसारी को ₹64 प्रति kg और ₹102 प्रति kg मूल्य वाली गेहूँ की दो किस्मों को किस अनुपात में मिलाना चाहिए ताकि, यदि वह मिश्रण को ₹111 प्रति kg की दर से बेचे, तो उसे 11% का लाभ प्राप्त हो?

Options :

4410092114348. ✔ 1 : 18

4410092114349. ✖ 3 : 19

4410092114350. ✖ 1 : 22
4410092114351. ✖ 11 : 23

Question Number : 53 Question Id : 441009516897 Question Type : MCQ

A man has invested ₹50,000 at a rate of 6% per annum simple interest for 3 years. Find the amount (in ₹) that he will receive after 3 years.

Options :

4410092023007. ✔ 59,000
4410092023008. ✖ 9,000
4410092023009. ✖ 60,000
4410092023010. ✖ 10,000

Question Number : 53 Question Id : 441009516897 Question Type : MCQ

एक व्यक्ति ने ₹50,000 की धनराशि को 6% वार्षिक साधारण ब्याज की दर से 3 वर्षों के लिए निवेश किया। 3 वर्ष बाद उसे प्राप्त होने वाली धनराशि (₹ में) ज्ञात कीजिए।

Options :

4410092023007. ✔ 59,000
4410092023008. ✖ 9,000
4410092023009. ✖ 60,000
4410092023010. ✖ 10,000

Question Number : 54 Question Id : 441009573293 Question Type : MCQ

The compound interest earned in 1 year on ₹3,20,000 at the rate of 20% per annum, compounded quarterly, is:

Options :

4410092248292. ✔ ₹68,962
4410092248293. ✖ ₹68,597
4410092248294. ✖ ₹68,367
4410092248295. ✖ ₹69,447

Question Number : 54 Question Id : 441009573293 Question Type : MCQ

₹3,20,000 की धनराशि पर त्रैमासिक रूप से संयोजित होने वाले 20% वार्षिक दर से 1 वर्ष का चक्रवृद्धि ब्याज ज्ञात कीजिए।

Options :

4410092248292. ✔ ₹68,962
4410092248293. ✖ ₹68,597
4410092248294. ✖ ₹68,367
4410092248295. ✖ ₹69,447

Question Number : 55 Question Id : 441009521087 Question Type : MCQ

Evaluate: $11 - 12 \div 3 \times 2$

Options :

4410092039767. ✔ 3
4410092039768. ✖ 2
4410092039769. ✖ 4
4410092039770. ✖ 1

Question Number : 55 Question Id : 441009521087 Question Type : MCQ

$11 - 12 \div 3 \times 2$ को हल कीजिए।

Options :

4410092039767. ✔ 3
4410092039768. ✖ 2
4410092039769. ✖ 4

4410092039770. ✖ 1

Question Number : 56 Question Id : 441009533880 Question Type : MCQ

If the 6-digit number N42M40 is divisible by 11, which of the options below can give a possibly correct relation between M and N?

Options :

4410092090916. ✔ $M - N = 2$

4410092090917. ✖ $M = N$

4410092090918. ✖ $M + N = 5$

4410092090919. ✖ $M - N = 1$

Question Number : 56 Question Id : 441009533880 Question Type : MCQ

यदि 6-अंकीय संख्या N42M40, 11 से विभाज्य है, तो नीचे दिए गए विकल्पों में से कौन-सा विकल्प, M और N के बीच संभवतः सही संबंध प्रदान कर सकता है?

Options :

4410092090916. ✔ $M - N = 2$

4410092090917. ✖ $M = N$

4410092090918. ✖ $M + N = 5$

4410092090919. ✖ $M - N = 1$

Question Number : 57 Question Id : 441009524855 Question Type : MCQ

Three numbers are in the ratio 7 : 2 : 15, and their LCM is 6510. Their HCF is:

Options :

4410092054839. ✔ 31

4410092054840. ✖ 63

4410092054841. ✖ 23

4410092054842. ✖ 53

Question Number : 57 Question Id : 441009524855 Question Type : MCQ

तीन संख्याएँ 7 : 2 : 15 के अनुपात में हैं, और उनका लघुत्तम समापवर्त्य (LCM) 6510 है। उनका महत्तम समापवर्तक (HCF) ज्ञात कीजिए।

Options :

4410092054839. ✔ 31

4410092054840. ✖ 63

4410092054841. ✖ 23

4410092054842. ✖ 53

Question Number : 58 Question Id : 441009857351 Question Type : MCQ

A number, when decreased by 27%, gives 3650. The number is:

Options :

4410093382376. ✔ 5000

4410093382377. ✖ 5400

4410093382378. ✖ 5500

4410093382379. ✖ 4800

Question Number : 58 Question Id : 441009857351 Question Type : MCQ

किसी संख्या में 27% की कमी करने पर 3650 प्राप्त होता है। वह संख्या ज्ञात कीजिए।

Options :

4410093382376. ✔ 5000

4410093382377. ✖ 5400

4410093382378. ✖ 5500

4410093382379. ✖ 4800

Question Number : 59 Question Id : 441009859316 Question Type : MCQ

70% of 50% of $\frac{3}{9}$ of a number is 378. The number is:

Options :

4410093390236. ✓ 3240

4410093390237. ✗ 4450

4410093390238. ✗ 6210

4410093390239. ✗ 6850

Question Number : 59 Question Id : 441009859316 Question Type : MCQ

किसी संख्या के $\frac{3}{9}$ के 50% का 70%, 378 है। संख्या ज्ञात कीजिए।

Options :

4410093390236. ✓ 3240

4410093390237. ✗ 4450

4410093390238. ✗ 6210

4410093390239. ✗ 6850

Question Number : 60 Question Id : 441009565051 Question Type : MCQ

A shopkeeper incurs a loss of 55% if he sells an article for ₹7,821. What price must he sell the article at in order to gain 15% on that article?

Options :

4410092215324. ✓ ₹19,987

4410092215325. ✗ ₹19,985

4410092215326. ✗ ₹19,988

4410092215327. ✗ ₹19,986

Question Number : 60 Question Id : 441009565051 Question Type : MCQ

यदि एक दुकानदार किसी वस्तु को ₹7,821 में बेचता है, तो उसे 55% की हानि होती है। उसी वस्तु पर 15% का लाभ अर्जित करने के लिए उसे वस्तु को किस मूल्य पर बेचना चाहिए?

Options :

4410092215324. ✓ ₹19,987

4410092215325. ✗ ₹19,985

4410092215326. ✗ ₹19,988

4410092215327. ✗ ₹19,986

Question Number : 61 Question Id : 441009561683 Question Type : MCQ

Arvind bought an article for ₹x. He sold it to Biru at a loss of 30%. Biru spent ₹157 on its transportation and sold it to Minu at a profit of 60%. If Minu bought it for ₹1,920, what is the value of x?

Options :

4410092201999. ✓ 1,490

4410092202000. ✗ 1,473

4410092202001. ✗ 1,503

4410092202002. ✗ 1,498

Question Number : 61 Question Id : 441009561683 Question Type : MCQ

अरविंद ने एक वस्तु ₹x में खरीदी। उसने इसे 30% हानि पर बीरू को बेच दिया। बीरू ने इसके परिवहन पर ₹157 खर्च किए और इसे 60% के लाभ पर मीनू को बेच दिया। यदि मीनू ने इसे ₹1,920 में खरीदा, तो x का मान ज्ञात कीजिए।

Options :

4410092201999. ✓ 1,490

4410092202000. ✗ 1,473

4410092202001. ✖ 1,503

4410092202002. ✖ 1,498

Question Number : 62 Question Id : 441009893758 Question Type : MCQ

A shopkeeper offers her customers a discount of 26% on her articles, and she still makes a profit of 45%. What is the marked price (in ₹) of an article if its cost price is ₹481?

Options :

4410093529102. ✔ 942.50

4410093529103. ✖ 921.37

4410093529104. ✖ 1,067.42

4410093529105. ✖ 1,115.29

Question Number : 62 Question Id : 441009893758 Question Type : MCQ

एक दुकानदार अपने ग्राहकों को अपनी वस्तुओं पर 26% का छूट प्रदान करता है, और फिर भी वह 45% का लाभ अर्जित करता है। यदि किसी वस्तु का क्रय मूल्य ₹481 है, तो उसका अंकित मूल्य (₹ में) ज्ञात कीजिए।

Options :

4410093529102. ✔ 942.50

4410093529103. ✖ 921.37

4410093529104. ✖ 1,067.42

4410093529105. ✖ 1,115.29

Question Number : 63 Question Id : 441009536859 Question Type : MCQ

The marked price of a cooker is the same at shops I, II, III and IV. Shop I allows two successive discounts of 36% and 74%, shop II allows successive discounts of 69% and 86%, shop III allows successive discounts of 21% and 95% and shop IV allows successive discounts of 99%, 98% and 62% on the marked price of the cooker. Which shop is selling the cooker at the lowest price?

Options :

4410092102832. ✔ Shop IV

4410092102833. ✖ Shop III

4410092102834. ✖ Shop II

4410092102835. ✖ Shop I

Question Number : 63 Question Id : 441009536859 Question Type : MCQ

दुकानों I, II, III और IV पर एक कुकर का अंकित मूल्य समान है। दुकान I, कुकर के अंकित मूल्य पर 36% और 74% की दो क्रमिक छूट प्रदान करती है, दुकान II, कुकर के अंकित मूल्य पर 69% और 86% की क्रमिक छूट प्रदान करती है, दुकान III, कुकर के अंकित मूल्य पर 21% और 95% की क्रमिक छूट प्रदान करती है, और दुकान IV, कुकर के अंकित मूल्य पर 99%, 98% और 62% की तीन क्रमिक छूट प्रदान करती है। कौन-सी दुकान कुकर को न्यूनतम मूल्य पर बेच रही है?

Options :

4410092102832. ✔ दुकान IV

4410092102833. ✖ दुकान III

4410092102834. ✖ दुकान II

4410092102835. ✖ दुकान I

Question Number : 64 Question Id : 441009899215 Question Type : MCQ

Ajay and Mohit together have ₹1,050. On taking ₹150 from Ajay, Ajay will have the same amount as what Mohit had earlier. Find the ratio of the amounts with Ajay and Mohit initially.

Options :

4410093550930. ✔ 4 : 3

4410093550931. ✖ 5 : 4

4410093550932. ✖ 7 : 6

4410093550933. ✖ 6 : 5

Question Number : 64 Question Id : 441009899215 Question Type : MCQ

अजय और मोहित के पास कुल मिलाकर ₹1,050 हैं। अजय से ₹150 लेने पर, अजय के पास उतनी ही राशि होगी जितनी मोहित के पास पहले थी। अजय और मोहित के पास शुरू में कितनी राशि थी, उसका अनुपात ज्ञात कीजिए।

Options :

- 4410093550930. ✓ 4 : 3
- 4410093550931. ✗ 5 : 4
- 4410093550932. ✗ 7 : 6
- 4410093550933. ✗ 6 : 5

Question Number : 65 Question Id : 441009899911 Question Type : MCQ

Ani, Bin and Dik start a business by investing ₹13,860, ₹16,380 and ₹18,900, respectively. Ani's share in the total profit is ₹4,620. The difference in the profit shares of Bin and Dik is:

Options :

- 4410093553714. ✗ ₹800
- 4410093553715. ✓ ₹840
- 4410093553716. ✗ ₹895
- 4410093553717. ✗ ₹900

Question Number : 65 Question Id : 441009899911 Question Type : MCQ

अनी, बिन और दिक क्रमशः ₹13,860, ₹16,380 और ₹18,900 का निवेश करके एक व्यवसाय शुरू करते हैं। कुल लाभ में अनी का हिस्सा ₹4,620 है। बिन और दिक के लाभ के हिस्सों में अंतर ज्ञात कीजिए।

Options :

- 4410093553714. ✗ ₹800
- 4410093553715. ✓ ₹840
- 4410093553716. ✗ ₹895
- 4410093553717. ✗ ₹900

Question Number : 66 Question Id : 441009547817 Question Type : MCQ

Pushpraj and Himani together invested ₹42,400 in a business. At the end of the year, out of a total profit of ₹8,000, Pushpraj's share was ₹1,000. What was the investment of Pushpraj?

Options :

- 4410092146664. ✓ ₹5,300
- 4410092146665. ✗ ₹4,255
- 4410092146666. ✗ ₹4,435
- 4410092146667. ✗ ₹5,705

Question Number : 66 Question Id : 441009547817 Question Type : MCQ

पुष्पराज और हिमानी ने मिलकर एक व्यवसाय में ₹42,400 का निवेश किया। वर्ष के अंत में, ₹8,000 के कुल लाभ में से, पुष्पराज का हिस्सा ₹1,000 था। पुष्पराज द्वारा किया गया निवेश ज्ञात कीजिए।

Options :

- 4410092146664. ✓ ₹5,300
- 4410092146665. ✗ ₹4,255
- 4410092146666. ✗ ₹4,435
- 4410092146667. ✗ ₹5,705

Question Number : 67 Question Id : 441009900059 Question Type : MCQ

A tap can fill a tank in 24 minutes and another can empty it in 12 minutes. If the tank is already half full and both the taps are opened together, the tank will be:

Options :

- 4410093554306. ✗ Filled in 12 minutes
- 4410093554307. ✓ Emptied in 12 minutes
- 4410093554308. ✗ Filled in 10 minutes

4410093554309. ✖ Emptied in 10 minutes

Question Number : 67 Question Id : 441009900059 Question Type : MCQ

एक नल किसी टंकी को 24 मिनट में भर सकता है और दूसरा नल उसे 12 मिनट में खाली कर सकता है। यदि टंकी पहले से आधी भरी हुई है और दोनों नल एक साथ खोल दिए जाएँ, तो टंकी _____।

Options :

- 4410093554306. ✖ 12 मिनट में भर जाएगी
- 4410093554307. ✔ 12 मिनट में खाली हो जाएगी
- 4410093554308. ✖ 10 मिनट में भर जाएगी
- 4410093554309. ✖ 10 मिनट में खाली हो जाएगी

Question Number : 68 Question Id : 441009518824 Question Type : MCQ

A and B working together can do a piece of work in 6 days. B alone can do the same work in 24 days. How long (in days) will A alone take to do double the work?

Options :

- 4410092030715. ✔ 16
- 4410092030716. ✖ 17
- 4410092030717. ✖ 8
- 4410092030718. ✖ 19

Question Number : 68 Question Id : 441009518824 Question Type : MCQ

A और B मिलकर किसी कार्य को 6 दिनों में पूरा कर सकते हैं। B अकेले उसी कार्य को 24 दिनों में पूरा कर सकता है। A को अकेले उसी कार्य का दोगुना कार्य करने में कितना समय (दिनों में) लगेगा?

Options :

- 4410092030715. ✔ 16
- 4410092030716. ✖ 17
- 4410092030717. ✖ 8
- 4410092030718. ✖ 19

Question Number : 69 Question Id : 441009896638 Question Type : MCQ

Siddhant walks to his office 3 km away from home. In the morning, he covers the distance in 2.5 hours whereas, while returning home in the evening, he takes 60 more minutes to cover the same distance. Find his average speed (in km/h) during the two-way journey.

Options :

- 4410093540622. ✔ 1
- 4410093540623. ✖ 1.5
- 4410093540624. ✖ 2
- 4410093540625. ✖ 2.5

Question Number : 69 Question Id : 441009896638 Question Type : MCQ

सिद्धांत घर से 3 km दूर अपने कार्यालय तक पैदल जाता है। सुबह वह यह दूरी 2.5 घंटे में तय करता है, जबकि शाम को घर लौटते समय उसे वही दूरी तय करने में 60 मिनट अधिक लगते हैं। दोनों दिशाओं में उसकी औसत चाल (km/h में) ज्ञात कीजिए।

Options :

- 4410093540622. ✔ 1
- 4410093540623. ✖ 1.5
- 4410093540624. ✖ 2
- 4410093540625. ✖ 2.5

Question Number : 70 Question Id : 441009899883 Question Type : MCQ

A car is travelling at the rate of 60 km/hr. This car covers a distance of 600 m in T seconds. The value of T is:

Options :

- 4410093553602. ✖ 45

4410093553603. ✓ 36

4410093553604. ✗ 52

4410093553605. ✗ 40

Question Number : 70 Question Id : 441009899883 Question Type : MCQ

एक कार 60 km/hr की चाल से चल रही है। यह कार T सेकंड में 600 m की दूरी तय करती है। T का मान ज्ञात कीजिए।

Options :

4410093553602. ✗ 45

4410093553603. ✓ 36

4410093553604. ✗ 52

4410093553605. ✗ 40

Question Number : 71 Question Id : 441009896705 Question Type : MCQ

A 110 m long train overtakes a man moving at a speed of 7 km/h (in the same direction) in 22 seconds. How much time (in seconds) will it take this train to completely cross another 365 m long train that is moving in the opposite direction at a speed of 20 km/h?

Options :

4410093540890. ✓ 38

4410093540891. ✗ 46

4410093540892. ✗ 48

4410093540893. ✗ 29

Question Number : 71 Question Id : 441009896705 Question Type : MCQ

एक 110 m लंबी रेलगाड़ी 7 km/h की चाल से (उसी दिशा में) चल रहे एक व्यक्ति को 22 सेकंड में पार करती है। इस रेलगाड़ी को विपरीत दिशा में 20 km/h की चाल से चल रही 365 m लंबी एक अन्य रेलगाड़ी को पूरी तरह से पार करने में कितना समय (सेकंड में) लगेगा?

Options :

4410093540890. ✓ 38

4410093540891. ✗ 46

4410093540892. ✗ 48

4410093540893. ✗ 29

Question Number : 72 Question Id : 441009592114 Question Type : MCQ

The area of a trapezium is 284 cm^2 . The length of its parallel sides are x cm and 85 cm with a perpendicular distance of 4 cm between them. Determine the value of x.

Options :

4410092323573. ✗ 54

4410092323574. ✗ 59

4410092323575. ✓ 57

4410092323576. ✗ 67

Question Number : 72 Question Id : 441009592114 Question Type : MCQ

एक समलम्ब चतुर्भुज (trapezium) का क्षेत्रफल 284 cm^2 है। इसकी समांतर भुजाओं की लंबाई x cm और 85 cm है और उनके बीच लंबवत दूरी 4 cm है। x का मान ज्ञात कीजिए।

Options :

4410092323573. ✗ 54

4410092323574. ✗ 59

4410092323575. ✓ 57

4410092323576. ✗ 67

Question Number : 73 Question Id : 441009601974 Question Type : MCQ

The volume of a cone with base radius r cm and height h cm is 476 cm^3 . What is the volume (in cm^3) of a cone with base radius $\frac{r}{2}$ cm and height $2h$ cm?

Options :

- 4410092363013. ✓ 238
- 4410092363014. ✗ 244
- 4410092363015. ✗ 242
- 4410092363016. ✗ 234

Question Number : 73 Question Id : 441009601974 Question Type : MCQ

आधार त्रिज्या r cm और ऊँचाई h cm वाले एक शंकु का आयतन 476 cm^3 है। आधार त्रिज्या $\frac{r}{2}$ cm और ऊँचाई $2h$ cm वाले शंकु का आयतन (cm^3 में) कितना है?

Options :

- 4410092363013. ✓ 238
- 4410092363014. ✗ 244
- 4410092363015. ✗ 242
- 4410092363016. ✗ 234

Question Number : 74 Question Id : 441009592060 Question Type : MCQ

The ratio of the volume of a cube to that of a sphere, which will exactly fit inside the cube, is:

Options :

- 4410092323357. ✗ $2 : \pi$
- 4410092323358. ✗ $4 : \pi$
- 4410092323359. ✓ $6 : \pi$
- 4410092323360. ✗ $8 : \pi$

Question Number : 74 Question Id : 441009592060 Question Type : MCQ

एक घन के आयतन और एक गोले के आयतन का अनुपात, जो घन के अंदर पूरी तरह से फिट होगा, _____ है।

Options :

- 4410092323357. ✗ $2 : \pi$
- 4410092323358. ✗ $4 : \pi$
- 4410092323359. ✓ $6 : \pi$
- 4410092323360. ✗ $8 : \pi$

Question Number : 75 Question Id : 441009592282 Question Type : MCQ

A solid metallic cone of height 12 cm and radius of base 15 cm is melted to make spherical balls each of 6-cm diameter. How many such balls can be made?

Options :

- 4410092324245. ✓ 25
- 4410092324246. ✗ 50
- 4410092324247. ✗ 75
- 4410092324248. ✗ 125

Question Number : 75 Question Id : 441009592282 Question Type : MCQ

12 cm ऊँचाई और 15 cm आधार त्रिज्या वाले एक ठोस धातु के शंकु को पिघलाकर 6 cm व्यास वाली गोलाकार गेंदें बनाई जाती हैं। ऐसी कितनी गेंदें बनाई जा सकती हैं?

Options :

- 4410092324245. ✓ 25

4410092324246. ✖ 50
4410092324247. ✖ 75
4410092324248. ✖ 125

General English

Section Id :	4410091096655
Section Number :	4
Section type :	Online
Mandatory or Optional :	Mandatory
Number of Questions :	21
Number of Questions to be attempted :	21
Maximum Instruction Time :	0
Sub-Section Number :	1
Sub-Section Id :	4410091100861
Question Shuffling Allowed :	Yes

Question Id : 441009419460 Question Type : COMPREHENSION Sub Question Shuffling Allowed : No Group Comprehension Questions : No Question Pattern Type : NonMatrix Question Numbers : (76 to 80)

Read the given passage carefully and answer the questions that follow.

In 1970, India set in motion the 'White Revolution,' the world's biggest dairy development programme, led by Dr. Verghese Kurien. 'Operation Flood', as it is otherwise known, transformed the dairy-deficient nation into the global leader in milk production. For the millions living in rural India, milk farming became the largest source of employment and income. India boasted the highest cattle population in the 1960s, yet it ranked among the lowest milk producers in the world. Between 1961 and 1970, total milk production had barely moved from 20.4 million tonnes to 20.8 million tonnes. Instead, the country relied on large scale imports to meet its requirements. To address this growing dairy crisis, a cooperative milk movement was launched in three phases over three decades, steered by social entrepreneurs, political leaders and millions of milk farmers. The idea was simple: To leave out the middleman and bridge the gap between dairy farmers and consumers. This way, the consumer paid a lower price and the spoils of the labour could directly benefit the farmer. Ultimately, farmers would feel incentivized to boost milk production, and a growing population would get access to more types of milk products.

Sub questions

Question Number : 76 Question Id : 441009419461 Question Type : MCQ

What was the main tactic employed by the pioneers of Operation Flood to increase milk production?

Options :

- 4410091642098. ✔ To remove the middlemen between dairy farmers and consumers
- 4410091642099. ✖ To increase the import of foreign dairy products
- 4410091642100. ✖ To reduce the number of dairy farmers
- 4410091642101. ✖ To establish government-run milk factories

Question Number : 77 Question Id : 441009419462 Question Type : MCQ

Identify the tone of the passage.

Options :

- 4410091642102. ✔ Objective and factual
- 4410091642103. ✖ Emotional and persuasive
- 4410091642104. ✖ Pessimistic and doubtful
- 4410091642105. ✖ Sarcastic and humorous

Question Number : 78 Question Id : 441009419463 Question Type : MCQ

How did India manage to meet its milk and dairy requirements in the 1960s?

Options :

- 4410091642106. ✖ By promoting small-scale milk production in rural areas
- 4410091642107. ✔ By importing such products from foreign nations
- 4410091642108. ✖ By exporting dairy products to other countries

4410091642109. ✖ By relying on local dairy cooperatives

Question Number : 79 Question Id : 441009419464 Question Type : MCQ

In how many phases was the cooperative milk movement launched?

Options :

4410091642110. ✖ Four

4410091642111. ✖ Two

4410091642112. ✔ Three

4410091642113. ✖ Five

Question Number : 80 Question Id : 441009419465 Question Type : MCQ

Select the most appropriate synonym of the word "incentivized" as used in the passage?

Options :

4410091642114. ✔ Supported

4410091642115. ✖ Criticised

4410091642116. ✖ Restricted

4410091642117. ✖ Punished

Question Id : 441009419460 Question Type : COMPREHENSION Sub Question Shuffling Allowed : No Group Comprehension Questions : No Question Pattern Type : NonMatrix

Question Numbers : (76 to 80)

Read the given passage carefully and answer the questions that follow.

In 1970, India set in motion the 'White Revolution,' the world's biggest dairy development programme, led by Dr. Verghese Kurien. 'Operation Flood', as it is otherwise known, transformed the dairy-deficient nation into the global leader in milk production. For the millions living in rural India, milk farming became the largest source of employment and income. India boasted the highest cattle population in the 1960s, yet it ranked among the lowest milk producers in the world. Between 1961 and 1970, total milk production had barely moved from 20.4 million tonnes to 20.8 million tonnes. Instead, the country relied on large scale imports to meet its requirements. To address this growing dairy crisis, a cooperative milk movement was launched in three phases over three decades, steered by social entrepreneurs, political leaders and millions of milk farmers. The idea was simple: To leave out the middleman and bridge the gap between dairy farmers and consumers. This way, the consumer paid a lower price and the spoils of the labour could directly benefit the farmer. Ultimately, farmers would feel incentivized to boost milk production, and a growing population would get access to more types of milk products.

Sub questions

Question Number : 76 Question Id : 441009419461 Question Type : MCQ

What was the main tactic employed by the pioneers of Operation Flood to increase milk production?

Options :

4410091642098. ✔ To remove the middlemen between dairy farmers and consumers

4410091642099. ✖ To increase the import of foreign dairy products

4410091642100. ✖ To reduce the number of dairy farmers

4410091642101. ✖ To establish government-run milk factories

Question Number : 77 Question Id : 441009419462 Question Type : MCQ

Identify the tone of the passage.

Options :

4410091642102. ✔ Objective and factual

4410091642103. ✖ Emotional and persuasive

4410091642104. ✖ Pessimistic and doubtful

4410091642105. ✖ Sarcastic and humorous

Question Number : 78 Question Id : 441009419463 Question Type : MCQ

How did India manage to meet its milk and dairy requirements in the 1960s?

Options :

4410091642106. ✖ By promoting small-scale milk production in rural areas

4410091642107. ✔ By importing such products from foreign nations

4410091642108. ✖ By exporting dairy products to other countries

4410091642109. ✖ By relying on local dairy cooperatives

Question Number : 79 Question Id : 441009419464 Question Type : MCQ

In how many phases was the cooperative milk movement launched?

Options :

4410091642110. ✖ Four

4410091642111. ✖ Two

4410091642112. ✔ Three

4410091642113. ✖ Five

Question Number : 80 Question Id : 441009419465 Question Type : MCQ

Select the most appropriate synonym of the word "incentivized" as used in the passage?

Options :

4410091642114. ✔ Supported

4410091642115. ✖ Criticised

4410091642116. ✖ Restricted

4410091642117. ✖ Punished

Sub-Section Number :

2

Sub-Section Id :

4410091100862

Question Shuffling Allowed :

Yes

Question Number : 81 Question Id : 441009482127 Question Type : MCQ

Select the most appropriate option to fill in the blank.

This is _____ most expensive car in the showroom.

Options :

4410091883857. ✖ a

4410091883858. ✖ an

4410091883859. ✔ the

4410091883860. ✖ No article required

Question Number : 81 Question Id : 441009482127 Question Type : MCQ

Select the most appropriate option to fill in the blank.

This is _____ most expensive car in the showroom.

Options :

4410091883857. ✖ a

4410091883858. ✖ an

4410091883859. ✔ the

4410091883860. ✖ No article required

Question Number : 82 Question Id : 441009122034 Question Type : MCQ

Which article is most appropriate to fill in the blank in the given sentence?

He kept asking for _____ pizza he saw advertised, so his mother ordered it from a local pizza outlet.

Options :

441009485102. ✖ Only 'a' is appropriate.

441009485103. ✖ Only 'an' is appropriate.

441009485104. ✔ Only 'the' is appropriate.

441009485105. ✖ Both 'a' and 'the' are appropriate.

Question Number : 82 Question Id : 441009122034 Question Type : MCQ

Which article is most appropriate to fill in the blank in the given sentence?

He kept asking for _____ pizza he saw advertised, so his mother ordered it from a local pizza outlet.

Options :

441009485102. ✖ Only 'a' is appropriate.

441009485103. ✖ Only 'an' is appropriate.

441009485104. ✔ Only 'the' is appropriate.

441009485105. ✖ Both 'a' and 'the' are appropriate.

Question Number : 83 Question Id : 441009145972 Question Type : MCQ

Select the most appropriate article to fill in the blank. If no article is needed, select 'No article required'.

They bought _____ adorable teddy bear from the toy store.

Options :

441009579758. ✔ an

441009579759. ✖ a

441009579760. ✖ the

441009579761. ✖ No article required

Question Number : 83 Question Id : 441009145972 Question Type : MCQ

Select the most appropriate article to fill in the blank. If no article is needed, select 'No article required'.

They bought _____ adorable teddy bear from the toy store.

Options :

441009579758. ✔ an

441009579759. ✖ a

441009579760. ✖ the

441009579761. ✖ No article required

Question Number : 84 Question Id : 441009146347 Question Type : MCQ

Select the most appropriate option to fill in the blank.

The students were talking _____.

Options :

441009581226. ✖ neatly

441009581227. ✔ noisily

441009581228. ✖ sleepily

441009581229. ✖ costly

Question Number : 84 Question Id : 441009146347 Question Type : MCQ

Select the most appropriate option to fill in the blank.

The students were talking _____.

Options :

441009581226. ✖ neatly

441009581227. ✔ noisily

441009581228. ✖ sleepily

441009581229. ✖ costly

Question Number : 85 Question Id : 441009482200 Question Type : MCQ

Select the most appropriate option to fill in the blank.

He is the _____ player in our team.

Options :

4410091884149. ✓ fastest

4410091884150. ✗ tall

4410091884151. ✗ big

4410091884152. ✗ driest

Question Number : 85 Question Id : 441009482200 Question Type : MCQ

Select the most appropriate option to fill in the blank.

He is the _____ player in our team.

Options :

4410091884149. ✓ fastest

4410091884150. ✗ tall

4410091884151. ✗ big

4410091884152. ✗ driest

Question Number : 86 Question Id : 441009482259 Question Type : MCQ

Select the most appropriate option to fill in the blank.

The menu offers a _____ variety of dishes.

Options :

4410091884385. ✓ wide

4410091884386. ✗ clean

4410091884387. ✗ heavy

4410091884388. ✗ warm

Question Number : 86 Question Id : 441009482259 Question Type : MCQ

Select the most appropriate option to fill in the blank.

The menu offers a _____ variety of dishes.

Options :

4410091884385. ✓ wide

4410091884386. ✗ clean

4410091884387. ✗ heavy

4410091884388. ✗ warm

Question Number : 87 Question Id : 441009479787 Question Type : MCQ

Select the most appropriate adjective to fill in the blank.

The _____ flowers bloomed in the spring.

Options :

4410091874497. ✓ fragrant

4410091874498. ✗ stinky

4410091874499. ✗ strong

4410091874500. ✗ stale

Question Number : 87 Question Id : 441009479787 Question Type : MCQ

Select the most appropriate adjective to fill in the blank.

The _____ flowers bloomed in the spring.

Options :

4410091874497. ✔️ **fragrant**

4410091874498. ❌ **stinky**

4410091874499. ❌ **strong**

4410091874500. ❌ **stale**

Question Number : 88 Question Id : 441009479825 Question Type : MCQ

Select the most appropriate option to fill in the blank.

We _____ expected that she would visit the college soon.

Options :

4410091874649. ✔️ **had**

4410091874650. ❌ **have**

4410091874651. ❌ **has**

4410091874652. ❌ **were**

Question Number : 88 Question Id : 441009479825 Question Type : MCQ

Select the most appropriate option to fill in the blank.

We _____ expected that she would visit the college soon.

Options :

4410091874649. ✔️ **had**

4410091874650. ❌ **have**

4410091874651. ❌ **has**

4410091874652. ❌ **were**

Question Number : 89 Question Id : 441009149856 Question Type : MCQ

Parts of a sentence are given below in jumbled order. Arrange the parts in the correct order to form a meaningful sentence.

- (1) as soon as the lights went out,
- (2) a sudden scream echoed
- (3) sending chills down everyone's spine
- (4) across the empty hallway,

Options :

441009595138. ✔️ **1-2-4-3**

441009595139. ❌ **1-4-2-3**

441009595140. ❌ **2-1-3-4**

441009595141. ❌ **1-2-3-4**

Question Number : 89 Question Id : 441009149856 Question Type : MCQ

Parts of a sentence are given below in jumbled order. Arrange the parts in the correct order to form a meaningful sentence.

- (1) as soon as the lights went out,
- (2) a sudden scream echoed
- (3) sending chills down everyone's spine
- (4) across the empty hallway,

Options :

441009595138. ✔️ **1-2-4-3**

441009595139. ❌ **1-4-2-3**

441009595140. ❌ **2-1-3-4**

441009595141. ❌ **1-2-3-4**

Question Number : 90 Question Id : 441009430136 Question Type : MCQ

Parts of a sentence are given below in jumbled order. Arrange the parts in the correct order to form a meaningful sentence.

- P. mixed with water and other ingredients
- Q. looks like a giant blender to be

R. loaded into a pulper which
S. at the paper mill the paper bale is

Options :

4410091680062. ✓ SRQP

4410091680063. ✗ RSQP

4410091680064. ✗ SRPQ

4410091680065. ✗ PSQR

Question Number : 90 Question Id : 441009430136 Question Type : MCQ

Parts of a sentence are given below in jumbled order. Arrange the parts in the correct order to form a meaningful sentence.

P. mixed with water and other ingredients

Q. looks like a giant blender to be

R. loaded into a pulper which

S. at the paper mill the paper bale is

Options :

4410091680062. ✓ SRQP

4410091680063. ✗ RSQP

4410091680064. ✗ SRPQ

4410091680065. ✗ PSQR

Question Number : 91 Question Id : 441009428541 Question Type : MCQ

Select the option that can be used as a one-word substitute for the given group of words.

A person who knows and is able to speak in several languages

Options :

4410091673682. ✓ Polyglot

4410091673683. ✗ Bibliophile

4410091673684. ✗ Glutton

4410091673685. ✗ Bibliophobia

Question Number : 91 Question Id : 441009428541 Question Type : MCQ

Select the option that can be used as a one-word substitute for the given group of words.

A person who knows and is able to speak in several languages

Options :

4410091673682. ✓ Polyglot

4410091673683. ✗ Bibliophile

4410091673684. ✗ Glutton

4410091673685. ✗ Bibliophobia

Question Number : 92 Question Id : 441009433602 Question Type : MCQ

Select the option that can be used as a one-word substitute for the given group of words.

A person or behaviour that is bad and impossible to change or improve

Options :

4410091693926. ✗ Illegible

4410091693927. ✗ Indelible

4410091693928. ✗ Incredible

4410091693929. ✓ Incurable

Question Number : 92 Question Id : 441009433602 Question Type : MCQ

Select the option that can be used as a one-word substitute for the given group of words.

A person or behaviour that is bad and impossible to change or improve

Options :

4410091693926. ✖ Illegible

4410091693927. ✖ Indelible

4410091693928. ✖ Incredible

4410091693929. ✔ Incorrigible

Question Number : 93 Question Id : 441009433611 Question Type : MCQ

Select the option that can be used as a one-word substitute for the given group of words.

the quality of seeming true or of having the appearance of being real

Options :

4410091693962. ✖ Fictional

4410091693963. ✖ Fabrication

4410091693964. ✔ Verisimilitude

4410091693965. ✖ Incredibility

Question Number : 93 Question Id : 441009433611 Question Type : MCQ

Select the option that can be used as a one-word substitute for the given group of words.

the quality of seeming true or of having the appearance of being real

Options :

4410091693962. ✖ Fictional

4410091693963. ✖ Fabrication

4410091693964. ✔ Verisimilitude

4410091693965. ✖ Incredibility

Question Number : 94 Question Id : 441009121056 Question Type : MCQ

Select the most appropriate meaning of the given proverb.

Look before you leap.

Options :

441009481242. ✖ Be adventurous and take chances.

441009481243. ✖ Always jump to conclusions.

441009481244. ✔ Consider the potential consequences before taking action.

441009481245. ✖ Never be afraid of heights.

Question Number : 94 Question Id : 441009121056 Question Type : MCQ

Select the most appropriate meaning of the given proverb.

Look before you leap.

Options :

441009481242. ✖ Be adventurous and take chances.

441009481243. ✖ Always jump to conclusions.

441009481244. ✔ Consider the potential consequences before taking action.

441009481245. ✖ Never be afraid of heights.

Question Number : 95 Question Id : 441009187836 Question Type : MCQ

Identify the idiom that fits the given situation.

The runaway convict had had nothing for many days, he ate excessively when offered food by the little girl.

Options :

441009741606. ✖ To sell like hot cakes
441009741607. ✔ To eat like a horse
441009741608. ✖ To let the bag out of the bag
441009741609. ✖ To go the extra mile

Question Number : 95 Question Id : 441009187836 Question Type : MCQ

Identify the idiom that fits the given situation.

The runaway convict had had nothing for many days, he ate excessively when offered food by the little girl.

Options :

441009741606. ✖ To sell like hot cakes
441009741607. ✔ To eat like a horse
441009741608. ✖ To let the bag out of the bag
441009741609. ✖ To go the extra mile

Question Number : 96 Question Id : 441009152486 Question Type : MCQ

Select the most appropriate proverb that can substitute the underlined segment in the given sentence.

Though I was never good at studies; however this term **I worked really hard and became the topper of my class**; the boys who used to make fun of me are speechless now.

Options :

441009605099. ✖ Empty vessels make the most noise.
441009605100. ✖ A friend in need is a friend indeed.
441009605101. ✖ As you sow so shall you reap.
441009605102. ✔ He who laughs last, laughs best.

Question Number : 96 Question Id : 441009152486 Question Type : MCQ

Select the most appropriate proverb that can substitute the underlined segment in the given sentence.

Though I was never good at studies; however this term **I worked really hard and became the topper of my class**; the boys who used to make fun of me are speechless now.

Options :

441009605099. ✖ Empty vessels make the most noise.
441009605100. ✖ A friend in need is a friend indeed.
441009605101. ✖ As you sow so shall you reap.
441009605102. ✔ He who laughs last, laughs best.

Question Number : 97 Question Id : 441009113087 Question Type : MCQ

Select the most appropriate ANTONYM of the highlighted word in the given sentence.

She remained **placid** despite the chaos around her.

Options :

441009449907. ✖ Calm
441009449908. ✔ Anxious
441009449909. ✖ Mysterious
441009449910. ✖ Sad

Question Number : 97 Question Id : 441009113087 Question Type : MCQ

Select the most appropriate ANTONYM of the highlighted word in the given sentence.

She remained **placid** despite the chaos around her.

Options :

441009449907. ✖ Calm

441009449908. ✔ Anxious

441009449909. ✖ Mysterious

441009449910. ✖ Sad

Question Number : 98 Question Id : 441009100227 Question Type : MCQ

Select the most appropriate synonym of the underlined word in the given sentence.

The politician's speech was full of rhetoric.

Options :

441009398858. ✔ Eloquence

441009398859. ✖ Clumsiness

441009398860. ✖ Arrogance

441009398861. ✖ Strength

Question Number : 98 Question Id : 441009100227 Question Type : MCQ

Select the most appropriate synonym of the underlined word in the given sentence.

The politician's speech was full of rhetoric.

Options :

441009398858. ✔ Eloquence

441009398859. ✖ Clumsiness

441009398860. ✖ Arrogance

441009398861. ✖ Strength

Question Number : 99 Question Id : 441009152746 Question Type : MCQ

Select the correctly spelt word to fill in the blank.

The _____ thief, feeling deep remorse for his actions, soon realised that his antipathy towards the affluent was what had beguiled him into committing the crime.

Options :

441009606143. ✔ contrite

441009606144. ✖ contrete

441009606145. ✖ contreit

441009606146. ✖ contreite

Question Number : 99 Question Id : 441009152746 Question Type : MCQ

Select the correctly spelt word to fill in the blank.

The _____ thief, feeling deep remorse for his actions, soon realised that his antipathy towards the affluent was what had beguiled him into committing the crime.

Options :

441009606143. ✔ contrite

441009606144. ✖ contrete

441009606145. ✖ contreit

441009606146. ✖ contreite

Question Number : 100 Question Id : 441009152759 Question Type : MCQ

Select the correctly spelt word to fill in the blank.

The thief decided to abandon his old ways, but later tried to abscond with the stolen money; however, the _____ police officer quickly adapted to the tricky situation and caught him.

Options :

441009606195. ✔ adamant

441009606196. ✖ adamant

441009606197. ✖ adamant

441009606198. ✖ adement

Question Number : 100 Question Id : 441009152759 Question Type : MCQ

Select the correctly spelt word to fill in the blank.

The thief decided to abandon his old ways, but later tried to abscond with the stolen money; however, the _____ police officer quickly adapted to the tricky situation and caught him.

Options :

441009606195. ✔ adamant

441009606196. ✖ adamant

441009606197. ✖ adamant

441009606198. ✖ adement